



Worksheet 16C




$$y = 2$$

$$x = 3$$




$$y = -3$$

$$x = 5$$




$$y = 2x - 5$$

$$y = -\frac{2}{3}x + 3$$




$$y = 3x - 7$$

$$y = -\frac{1}{5}x + 9$$




$$y = \frac{3}{4}x - 5$$

$$y = x - 7$$




$$x = 5$$

$$y = 3x - 4$$




$$y = 4$$

$$y = 2x + 11$$




$$x = -2$$

$$2x + 3y = 7$$




$$y = 3x - 5$$

$$y = 3x + 5$$




$$3x + 5y = 10$$

$$y = 2x + 2$$




$$y = -2x + 3$$

$$4x + 2y = 6$$




$$y + 2x = 2$$

$$y - x = -4$$




$$y = 3x - 5$$

$$y = 7x - 5$$




$$x = 3y - 7$$

$$x + 2y = 8$$



$$y = -3x + 2$$

$$y = 5x + 2$$



$$x + 3y = 5$$

$$5x - 2y = 6$$